



SIMPERING

SAFAL PREPARATORY EXAMINATION

Instructions:

1. There are 30 questions all
2. The test is 1 hour long.
3. You will need: pen, pencil, rubber, and ruler.
4. Try to answer all of the questions.
5. All questions carry equal mark.
6. Check your work carefully.
7. Ask your teacher if you are not sure what to do.

CLASS: 3

SUBJECT: MATHS

WHERE TO LOOK FROM







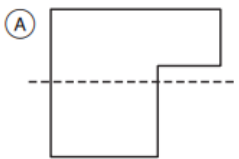
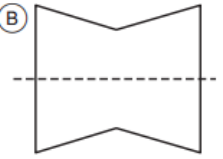
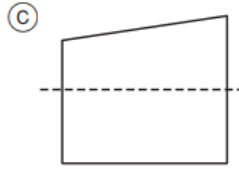
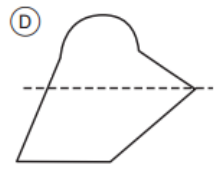







NO OF QUESTIONS:10

SAFAL PREPARATORY TEST (MATHS)


GRADE:3

Where to Look from

1	<p>Which shape is a rectangle?</p> <p>(A) </p> <p>(B) </p> <p>(C) </p> <p>(D) </p>
2	<p>What is the shape of the following object</p> <p>(A) cone</p> <p>(B) cylinder</p> <p>(C) sphere</p> <p>(D) none of these</p> 
3	<p>What is the time does the clock shows?</p> <p>(A) 9:45</p> <p>(B) 10:15</p> <p>(C) 10:45</p> <p>(D) 11:00</p> 
4	<p>Which of the following shapes can be folded along the dotted line so the parts Match</p> <p>(A) </p> <p>(B) </p> <p>(C) </p> <p>(D) </p>
5	<p>Which of the following will complete the image:</p>  <hr/> <p>(A) </p> <p>(B) </p> <p>(C) </p> <p>(D) </p>
6	<p>Which of the following will complete the figure?</p>

<p>7</p>	<p>Which of the following is a top view of the car?</p>
<p>8</p>	<p>Which of the following can't fold into two equal parts by using dotted line?</p>
<p>9</p>	<p>The following image is a view of</p> <p>(A) Top view of a classroom (B) Side view of a classroom (C) Backside view of a classroom (D) Front view of a classroom</p>



10	<p>How can you write 56,890 in expanded notation?</p> <p>(A) $5 + 6 + 8 + 9 + 0 =$ (B) $50,000 + 6,000 + 800 + 90 =$ (C) $56,000 + 8,900 =$ (D) $0.5 + 0.06 + 0.008 + 0.0009 =$</p>
11	<p>How many tens are in 60?</p> <p>(F) 6 (G) 10 (H) 1 (J) 0</p>
12	<p>Find the following words by looking at their halves</p> <p>DECT</p> <p>(F) BEST (H) DUST (G) PEST (J) DECT</p>
13	<p>Find the following words by looking at their halves</p> <p>CODE</p> <p>(A) GOAT (B) SODE (C) COBE (D) CODE</p>
14	<p>Find the letter by drawing next half</p> <p></p> <p>(A) W (B) V (C) U (D) M</p>
15	<p>$12 + 29 + 6 =$</p> <p>(A) 45 (B) 49 (C) 47 (D) None of these</p>