

Half Yearly Assessment

ENVIRONMENTAL SCIENCE




3rd Grade



Maximum 2Hrs.

VectorStock.com/20296371


My Name.....
My Roll No.....



TEACHER
PLEASE SIGN

1. Colour any three animals one flower, one bird and one tree:

(3)



2. Write any three animals that you see in the lake.


(3)



1. _____
2. _____
3. _____

3. Observe the leaves and do as instructed:

(1 + 2 = 3)



1. Colour the leaves

2. Write any two differences between these two leaves

Leaf 1	Leaf 2

4. Write the names of plants: (3)

See everywhere	See very rarely

5. Write any three uses of water: (3)





1. _____

2. _____

3. _____

6. Draw any two sources of water and colour it: (3)



7. In every row put a round one that is different from the others (one is did for you). (3)

River, Mountain, Lake, Pond,

— 1. Bathing, Washing clothes, Swimming, Combing hair,

— 2. Fish, Duck, Monkey, Crocodile,

3. Boat Ship yacht Train

—

8. You are going to celebrate your birthday by cutting the cake: (3)



1. Colour the cake.

2. Before cutting the cake you need to call _____

2. After cutting the cake to whom will you give first?

9. What are the things you can do to maintain cleanliness in your class? Use the following picture to write your answer: (3)



1. _____




2. _____

3. _____



7. What can they eat what they cannot eat? (3)





What can they eat What they can not eat

	Child	_____	_____
		_____	_____
	Young	_____	_____
		_____	_____
	Old	_____	_____
		_____	_____

8. Write the names of any three food items that can be made out of rice: (3)

Rice		
_____	_____	_____

9. Draw the various emotions on emoji (3)

			
Happy	Sad	Crying	Angry

10. Write the names of birds by seeing their beaks:

(3)



11. Put the ✓ or ✗ mark based on your observations of the following birds

(3)

Name of the bird	Where you saw it				
	In water	On the tree	On the ground	In the house	Flying
Parrot	_____	_____	_____	_____	_____
Eagle	_____	_____	_____	_____	_____
Kingfisher	_____	_____	_____	_____	_____

12. Meena is on the way to her school, complete the picture to show the changes after rain
(2+1=3)



Write any two changes you made in the picture:



13. Arun is going to prepare some chapthies help him.

(3)

Materials				
Utensils				
Process	Mix Atta with water and salt			

14. Classify the vehicles:

(1 ½ + 1 ½ = 3)


Helicopter, Truck, Bus, Aeroplane, Bike, Ship, Boat, Lorry, Scooter, Sail, Train

Travels on the land	
Travels on the air	
Travels on the water	

Name of the vehicle	Uses
Helicopter	
Ambulance	
Train	
Trucks	

11. Match the birds with their food.

(2)



9. Write a caption for this picture:

(2)



Caption _____

25. Observe the following

(2)



Interval time we all
were in wash area



Wooo..
Bell Rang!!!!
All ran back to class after closing taps




You are surprised! This is the
condition of water taps! What
will you do?

Answer _____

4. Write a poem based on the following:

(2)



You completed the writing

If you have time once again read your answer



My Pledge

I will always come to school prepared to learn!

I will set high expectations for myself and others!

I will treat myself, others & property with respect!

I will always take responsibility for my choices!

I will always strive to be the best friend I can be!

