

Summative Assessment I

Class: VII

SOCIAL SCIENCE

Maximum Marks: 90

Time: 3 Hrs.

General Instruction

1. All questions are compulsory.
2. Maintain answer sheet neatly



I choose the right answer from the bracket:

(10)

1. Consider the following statement:

A Turkish slave by origin he was purchased by Muhammad Ghori who later made him governor. After the death of his master he became the leader of the Hindusthan.

This statement is about:

- | | |
|--------------------|---------------------------|
| (A) Muhammad Gazni | (B) Qutub - ud - di Aibak |
| (C) Balban | (D) Muhammad Ghori |

2. Which of the following is not ruled India during 'Sultanate Period'?

- | | |
|-------------------|---------------------|
| (A) Slave Dynasty | (B) Khalji Dyanasty |
| (C) Mughal Empire | (D) Sayyid Dynasty |

3. The rock which is made up of molten magma is

- | | |
|-----------------|-------------------|
| (A) Igneous | (B) Sedimentary |
| (C) Metamorphic | (D) None of these |

4. A place where documents and manuscripts are stored?

- | | |
|---------------|--------------|
| (A) Museum | (B) Achieves |
| (C) Monastery | (D) Factory |

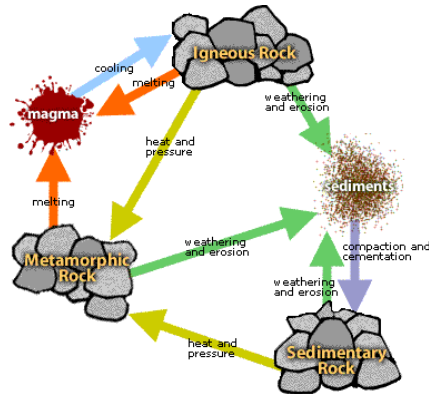
5. A person who makes maps?

- | | |
|-----------------|-----------------|
| A) Artist | B) Photographer |
| B) Cartographer | C) Painter |

6. A written document that lays down basic rules and regulation for the people and government?

- | | |
|-----------------|-----------------------|
| A) Constitution | B) Fundamental Rights |
| B) IPC | C) Law |

7. The Following diagram is associated with



- A) Rock formation
- B) Rock Cycle
- C) Structure of the rock
- D) Three types of rock

8. In a democratic Government which one of the following organ is responsible to make law?

- A) Executive
- B) Supreme Court
- C) Legislature
- D) Judiciary

9. Which one of the following is not a Human made environment?

- A) Air
- B) Building
- C) Road
- D) Bridges

10. Which one of the following protects us from harmful sun rays?

- A) Carbon dioxide
- B) Nitrogen
- C) Ozone
- D) Oxygen

SECTION A - HISTORY

II. Match the following:

(5 x 1 = 5)

- | | | |
|---------------------------|---|---------------------------|
| 1. Muhammad Ghori | - | Mughal Empire |
| 2. Qutb -ud - din - Aibak | - | Battle of Tarain |
| 3. Sultana Raziya | - | Slave Dynasty |
| 4. Vijayalaya | - | Only woman ruler in Delhi |
| 5. Babar | - | Founder of Chola Dynasty |

III. Fill in the blanks :

(5 x 1 =5)

1. contains detail of rulers that may not be true
2. The Mughal followed the division of inheritance among all the sons which is called

3. Kitab - ul - Hind was a famous book published during the period of Gazni's invasion this book was written by
4. During the Chola period Brahmins often received land grants from rulers, these land grants are called
5. If Zat determined a Mansabdar's rank and salary Sawar indicated his

IV. Answer the following:- (Any Five)

(5 x 3 = 15)

1. Who was considered a "foreigner" during medieval period?
2. In what ways has the meaning of the term "Hindustan" changed over the centuries?
3. Write a short note about "tripartite struggle"?
4. Write a short note about 'Chola Administration'
5. Mention main features of Mansabdari System under the 'Mughal Administration'
6. Write a short note about Akbar's religious policy
7. Write the meaning of following terms used in 'Sultanate administration'

A) Muqti

B) Iqtas

C) Samanta

V. Answer in Detail: (Any one)

(1 x 5 = 5)

29. Administrative reforms of Muhammad – bin – Tughluqu were well conceived but poorly executed. Explain .
30. Explain major features of Mughal administration.

SECTION B GEOGRAPHY

VI. Fill in the blanks:

(6 x 1 = 6)

1. Limestone is metamorphosed into
2. The innermost layer of the earth is made up of nickel and iron and it is called.....
3. The relation between the living organism as well as the relation between the organism and their surrounding form.....
4. Disintegration and decomposition of rock is called.....
5. The rhythmic rise and fall of ocean water twice in a day is called
6. The movement of air from high pressure area to low pressure area is called



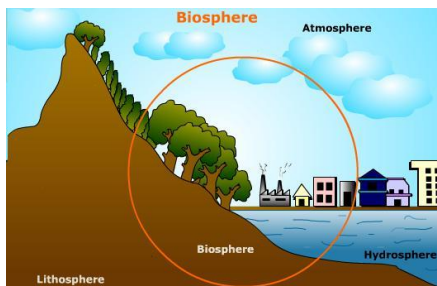
VII. Answer the following: (Any eight)

(8 x 3 = 24)

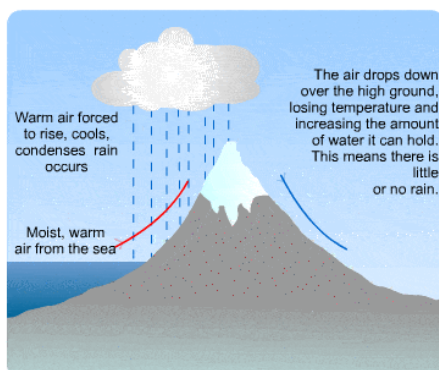
1. Observe the following and write a short note about components of natural environment



2. See the diagram and explain about biosphere.

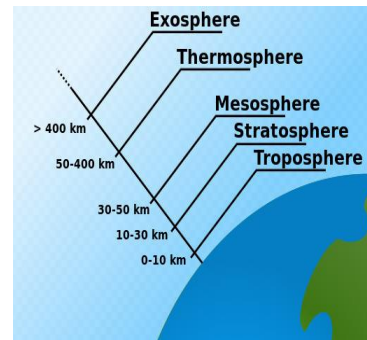
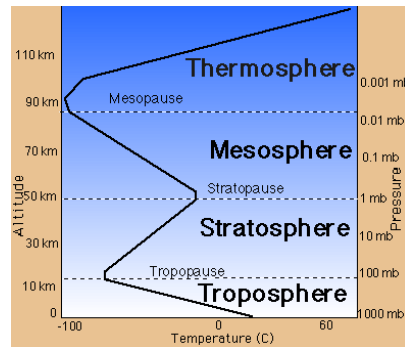


3. What are endogenic and exogenic forces?
4. What are sand dunes
5. Identify following rainfall mechanism and write a short note about it.



6. Draw a diagram to show the structure of Volcano.
7. Write a short about various land forms created by rivers.

8. Observe the following diagram and write a short note about the 'Structure of Atmosphere'



9. Differentiate permanent wind and seasonal wind.
10. What do you mean by sea arches?

SECTION C SOCIAL AND POLITICAL LIFE

VIII. Give one word or phrase for the following:

(5 x 1 = 5)

- All adult citizen those who have 18 years of age and above have the right to vote
- The political party that has the majority and has formed the Govt.
- This movement of Afro - Americans became the reason for the end of discrimination based on race
- Form of Govt. in which people elect their rulers
- Geographical area divided for conducting election.

IX. Answer the following:

(5 x 3 = 15)

- Write major functions of Govt. in democracy
- What is the difference between majority party and opposition
- Why does Govt. Organizes press conference
- 'The implementation of mid day meal scheme brought positive effect'. Explain
- Even though gender discrimination is reducing in Indian society, still is continuing. Explain the statement.
- Observe result of Kerala State Legislative Assembly Election 2016 assembly election. And answer the following



- As per the result which alliance is eligible to form Govt.?
- What is the total number of seats in Kerala Legislative assembly?
- What is the total number of seats won by opposition?